



# G.D DAV PUBLIC SCHOOL

BHANDARKOLA, SATAR ROAD, DEOGHAR

## SUMMER VACATION ASSIGNMENT AND PROJECT: 2026-27

SUBJECT: ENGLISH

CLASS & SEC: VI / \_\_\_\_\_

NAME: \_\_\_\_\_ ROLL No. \_\_\_\_\_

### Assignment:

#### 1) Passage: The Honest Woodcutter

Once upon a time, there lived a poor woodcutter in a small village. Every day, he went to the forest to cut wood and earn his living. One day, while cutting a tree near a river, his axe slipped from his hand and fell into the water.

The woodcutter became very sad because he had only one axe, and he could not afford to buy a new one. He sat near the river and started crying. Suddenly, a fairy appeared and asked him why he was crying.

The woodcutter told her the truth. The fairy dived into the river and brought out a golden axe. She asked if it was his. The woodcutter replied, "No, it is not mine." Then she brought a silver axe, but again he refused. Finally, she brought his iron axe, and he happily accepted it.

The fairy was pleased with his honesty and rewarded him by giving him all three axes.

#### **Multiple Choice Questions:**

1. What was the woodcutter's job?

A. Farmer                      B. Fisherman                      C. Woodcutter                      D. Shopkeeper

2. Where did the woodcutter go every day?

A. Market                      B. Forest                      C. River                      D. Town

3. What fell into the river?

A. Bag                      B. Axe                      C. Hat                      D. Shoes

4. Why did the woodcutter start crying?

A. He was hungry                      B. He lost his axe                      C. He was tired                      D. He was sick

5. Who appeared near the river?

A. King                      B. Friend                      C. Fairy                      D. Farmer

6. What was the first axe the fairy showed?

A. Iron                      B. Silver                      C. Golden                      D. Wooden

7. What did the woodcutter say about the golden axe?

A. It was his                      B. It was broken                      C. It was not his                      D. He wanted it

8. Which axe belonged to the woodcutter?

- A. Golden                      B. Silver                      C. Iron                      D. Wooden

9. Why did the fairy reward the woodcutter?

- A. For his strength              B. For his honesty              C. For his hard work              D. For his kindness

10. What is the moral of the story?

- A. Honesty is the best policy                      B. Work hard every day  
C. Help others always                      D. Never go to the forest

**2. Choose the correct adverb form:**

**1. Loud**

- a) Loudness                      b) Loudly                      c) Louder                      d) Louding

**2. Bold**

- a) Boldness                      b) Boldly                      c) Bolder                      d) Bolding

**3. Quick**

- a) Quickness                      b) Quickly                      c) Quicker                      d) Quickful

**4. Merry**

- a) Merrily                      b) Merryful                      c) Merriness                      d) Merrying

**5. Neat**

- a) Neatly                      b) Neatness                      c) Neater                      d) Neating

**3. Choose the correct abstract noun:**

**1. Happy**

- a) Happiness                      b) Happily                      c) Happyful                      d) Happier

**2. Brave**

- a) Bravely                      b) Bravery                      c) Braving                      d) Braveful

**3. Wise**

- a) Wisely                      b) Wisdom                      c) Wiseness                      d) Wiseful

**4. Hungry**

- a) Hunger                      b) Hungrily                      c) Hungryful                      d) Hungerness

**5. Kind**

- a) Kindly                      b) Kindness                      c) Kinder                      d) Kindful

**Project:**

Make a web chart of parts of speech with their examples.



# G.D DAV PUBLIC SCHOOL

BHANDARKOLA, SATAR ROAD, DEOGHAR

**SUMMER VACATION ASSIGNMENT AND PROJECT: 2026-27**

SUBJECT: HINDI

CLASS & SEC: VI / \_\_\_\_\_

NAME: \_\_\_\_\_

ROLL No. \_\_\_\_\_

पाठ: 1. साथी हाथ बढ़ाना | 2. चिट्ठी के अक्षर

खंड 'क' (ज्ञान सागर – साहित्य)

I. अति लघु उत्तरीय प्रश्न (एक शब्द/वाक्य):

1. 'साथी हाथ बढ़ाना' कविता के कवि का नाम क्या है?
2. महिपाल सिंह कौन-सा समाचार पत्र संपादित करते थे?

II. लघु उत्तरीय प्रश्न (20-30 शब्द):

1. 'साथी हाथ बढ़ाना' कविता के माध्यम से कवि क्या संदेश देना चाहता है?
2. "इंसान चाहे तो पैदा कर दे चट्टानों में राहें" — इस पंक्ति का आशय स्पष्ट कीजिए।

खंड 'ख' (अभ्यास सागर – व्याकरण)

1. नीचे दिए गए शब्दों के वर्ण-विच्छेद कीजिए:

- श्रमिक: \_\_\_\_\_
- चिट्ठी: \_\_\_\_\_

2. समानार्थी (पर्यायवाची) शब्द लिखिए:\*\*

- हाथ: \_\_\_\_\_ , \_\_\_\_\_
- पर्वत: \_\_\_\_\_ , \_\_\_\_\_
- खत: \_\_\_\_\_ , \_\_\_\_\_

III. भाषा की बात:

1. वाक्यों में से विशेषण और विशेष्य छाँटकर लिखिए:

महिपाल सिंह की लिखावट बहुत सुंदर थी।

- विशेषण: \_\_\_\_\_ | विशेष्य: \_\_\_\_\_
- पर्वत ने ऊँचा सीस झुकाया।
- विशेषण: \_\_\_\_\_ | विशेष्य: \_\_\_\_\_

3. उपसर्ग अलग कीजिए:

- अभिमान: \_\_\_\_\_ + \_\_\_\_\_
- परिश्रम: \_\_\_\_\_ + \_\_\_\_\_

खंड 'ग' (लेखन और रचनात्मक कौशल)

V. रिक्त स्थान पूर्ति (कविता के आधार पर):

- “एक से एक मिले तो \_\_\_\_\_, बन सकता है \_\_\_\_\_।”
- “अपनी \_\_\_\_\_ सुख की भी, अपनी \_\_\_\_\_ दुख की।”

खंड 'घ' (प्रोजेक्ट कार्य – Project Work)

विषय: “साहस और अभ्यास की जीत”

निर्देश:

महिपाल सिंह ने अपना दायँ हाथ खोने के बाद भी बाएँ हाथ से लिखने का अभ्यास किया और सफल हुए।



# G.D DAV PUBLIC SCHOOL

BHANDARKOLA, SATAR ROAD, DEOGHAR

**SUMMER VACATION ASSIGNMENT AND PROJECT: 2026-27**

SUBJECT: SANSKRIT

CLASS & SEC: VI / \_\_\_\_\_

NAME: \_\_\_\_\_

ROLL No. \_\_\_\_\_

1. प्रश्नानाम् उत्तराणि लिखन्तु –

(क) विद्यालये कानि सुन्दराणि सन्ति?

उत्तर:

(ख) वयम् केषां सम्मानम् कुर्मः?

उत्तर:

(ग) वयम् कुत्र क्रीडामः धावमः च?

उत्तर:

(घ) के स्नेहेन पाठयन्ति?

उत्तर:

(ङ) कः विशालः अस्ति?

उत्तर:

(च) वयम् मिलित्वा किम् कुर्मः?

उत्तर:

(छ) कस्य अनेकानि मित्राणि सन्ति

उत्तर:

(ज) विद्यालये अहम् कैः सह क्रीडामि?

उत्तर:

(झ) विद्यालये अनेकानि कानि सन्ति?

उत्तर:

(ञ) अहम् प्रतिदिनं कुत्र गच्छामि?

उत्तर:

2. उचित शब्दार्थम् चित्वा लिखन्तु

(विजयः, अग्रे – अग्रे, पृथ्वी, युद्धे, देहि )

(क) पुरः पुरः \_\_\_\_\_

(ख) प्रयच्छ \_\_\_\_\_

(ग) जयः \_\_\_\_\_

(घ) भूमि \_\_\_\_\_

(ङ) रणे \_\_\_\_\_

3. वर्ण – योजनम् कुर्वन्तु (join the letters )

(क) य् + अ + द् + आ =

(ख) स् + अ + द् + आ =

(ग) क् + अ + द् + आ =

(घ) क् + उ + त् + र् + अ =

(ङ) य् + अ + द् + ई =

4. वर्ण -विन्यासं कुर्वन्तु (Disjoin the letters )

(क) पुनः =

(ख) एकदा =

(ग) आम् =

(घ) परन्तु =

(ङ) अथवा =



# G.D DAV PUBLIC SCHOOL

BHANDARKOLA, SATAR ROAD, DEOGHAR

## SUMMER VACATION ASSIGNMENT AND PROJECT: 2026-27

SUBJECT: MATHEMATICS

CLASS & SEC: VI / \_\_\_\_

NAME: \_\_\_\_\_ ROLL No. \_\_\_\_\_

### A. Tick the correct options

1) Convert 60 into Roman numeral

- a) L                      b) XL                      c) LX                      d) XXL

2) XXII means in Hindu Arabic numerals

- a) 23                      b) 25                      c) 27                      d) 22

3) Estimate the product  $56 \times 12$

- a) 500                      b) 400                      c) 600                      d) 550

4) Estimate the sum  $43+59$

- a) 90                      b) 80                      c) 100                      d) 110

5) Sum of smallest 5 digit numeral and smallest 3 digit numeral

- a) 10000                      b) 10010                      c) 11000                      d) 10100

6) Greatest 5 digit number using 4,7,9

- a) 47779                      b) 94447                      c) 99947                      d) 99974

7) Sum of even prime and first odd prime is

- a) 6                      b) 7                      c) 9                      d) 5

8) Number 12 has \_\_\_\_ factors

- a) 4                      b) 5                      c) 6                      d) 9

9) Which is perfect number?

- a) 12                      b) 24                      c) 6                      d) 10

10) Value of this expression

$$5+7-12 \div 3 \times 1$$

- a) 8                      b) 10                      c) 9                      d) 6

B) 1) Write BODMAS RULE with 3 examples.

2) Make a number tree of 60.



# G.D DAV PUBLIC SCHOOL

BHANDARKOLA, SATAR ROAD, DEOGHAR

## SUMMER VACATION ASSIGNMENT AND PROJECT: 2026-27

SUBJECT: SCIENCE (PHYSICS)

CLASS & SEC: VI / \_\_\_\_\_

NAME: \_\_\_\_\_ ROLL No. \_\_\_\_\_

1. The SI unit of length is \_\_\_\_\_
2. Name any two devices used to measure length \_\_\_\_\_ , \_\_\_\_\_
3. Which unit would you use to measure the length of a pencil \_\_\_\_\_
4. Why are handspan is not reliable for measurements?

Ans.-

5. What is motion? Give example.

Ans-

6. Give one example of circular motion.

Ans-

7. Name the motion of a swinging pendulum \_\_\_\_\_
8. A type of motion does a car moving on a straight road have \_\_\_\_\_
9. Give two examples each of

(A) Periodic motion

i) \_\_\_\_\_

ii) \_\_\_\_\_

(B) Non-periodic motion

i) \_\_\_\_\_

ii) \_\_\_\_\_

10. Differentiate between rectilinear motion and circular motion.

Ans-

11. What is oscillatory motion? Give two example.

Ans.-



# G.D DAV PUBLIC SCHOOL

BHANDARKOLA, SATAR ROAD, DEOGHAR

## SUMMER VACATION ASSIGNMENT AND PROJECT: 2026-27

SUBJECT: SCIENCE (CHEMISTRY)

CLASS & SEC: VI / \_\_\_\_

NAME: \_\_\_\_\_ ROLL No. \_\_\_\_\_

**(a) Define.**

1) Matter:

2) Natural material:

3) Solubility:

4) Transparency:

**(b) Fill in the blanks :-**

1) The process of grouping objects with similar properties is called \_\_\_\_\_

2) Smell of perfume reaches us by the process of \_\_\_\_\_

3) Light does not pass through a blackboard as it is an \_\_\_\_\_ object.

4) Solubility of a gas, in water, decreases on \_\_\_\_\_ increasing the temperature.

**Project:**

Make a model showing:

Solid → ice/stone

Liquid → water/oil

Gas → air/steam

You can use:

Cotton for gas

Blue paper for water

Clay or thermocol for solids

**Explain:**

Shape

Volume

Particle arrangement

Add labels and short definitions.



# G.D DAV PUBLIC SCHOOL

BHANDARKOLA, SATAR ROAD, DEOGHAR

## SUMMER VACATION ASSIGNMENT AND PROJECT: 2026-27

SUBJECT: SCIENCE (**BIOLOGY**)

CLASS & SEC: VI / \_\_\_\_

NAME: \_\_\_\_\_ ROLL No. \_\_\_\_\_

1. Decomposers include –

a) Bacteria only      b) fungi only      c) bacteria as well as fungi      (d) only the scavengers

2. An animal that is not affected by the heat of the desert is -----

a) Rat      b) camel      c) cow      d) lion

3. The colour of dustbins in which biodegradable waste is collected is-

a) Red      b) blue      c) orange      d) green

4. Write the meaning of the term ‘vermi composting’.

5. Make a Poster on “Harvest Water to Harness Life”.



# G.D DAV PUBLIC SCHOOL

BHANDARKOLA, SATAR ROAD, DEOGHAR

## SUMMER VACATION ASSIGNMENT AND PROJECT: 2026-27

SUBJECT: SOCIAL SCIENCE (**HISTORY/CIVICS**)

CLASS & SEC: VI / \_\_\_\_

NAME: \_\_\_\_\_ ROLL No. \_\_\_\_\_

### 1. MCQs (Multiple Choice Questions)

Chapter: Studying the Past

i. History is the study of:

- a) Present                      b) Past                      c) Future                      d) Geography

ii. A person who studies history is called:

- a) Scientist                      b) Historian                      c) Doctor                      d) Artist

iii. Manuscripts are:

- a) Printed books                      b) Written records by hand                      c) Paintings                      d) Coins

iv. Archaeologists study:

- a) Living people                      b) Past remains                      c) Future events                      d) Weather


v. Inscriptions are:

- a) Songs                      b) Stories                      c) Writings on stone/metal                      d) Map


### 2. Chart paper work :

👉 Title: "Sources of History"

Draw and label:

 Artefacts (pots, tools)

Coins

 Manuscripts

  Monuments

**3. Answer the following questions:-**

- i. What is history?
  
  
  
  
  
  
  
  
  
  
- ii. Why do we study history?

**CIVICS**

**1. MCQs (5 Questions)**

- I. What does “Unity in Diversity” mean?
  - a) People are same in all ways
  - b) People live separately
  - c) People are different but live together peacefully
  - d) People do not respect each other
2. Which of the following shows diversity?
  - a) Same language everywhere
  - b) Different cultures, languages, and traditions
  - c) Same food habits
  - d) Same religion
3. What helps in maintaining unity in a diverse country like India?
  - a) Fighting with each other
  - b) Respecting differences
  - c) Ignoring others
  - d) Following only one culture
4. Which of the following is an example of unity?
  - a) Celebrating festivals together
  - b) Avoiding neighbors
  - c) Not helping others
  - d) Living alone
5. India is called a diverse country because:
  - a) It has only one culture
  - b) It has many religions, languages, and traditions
  - c) It has no festivals
  - d) It has same food everywhere

**2. How does unity help in community life?**

**3. What do you mean by diversity? Give one example.**

**4. PROJECT WORK**

**Topic:** Unity in Diversity

Instructions for Making Project File

- i. Use A4 size sheets or a project /notebook
- ii. Make cover page decorative.
- iii. Write introduction, give index
- iv. Make a list of all topics with page numbers (Introduction, Diversity, Unity, Importance, etc.)
- v. paste or draw pictures.



# G.D DAV PUBLIC SCHOOL

BHANDARKOLA, SATAR ROAD, DEOGHAR

## SUMMER VACATION ASSIGNMENT AND PROJECT: 2026-27

SUBJECT: SOCIAL SCIENCE (GEOGRAPHY)

CLASS & SEC: VI / \_\_\_\_

NAME: \_\_\_\_\_ ROLL No. \_\_\_\_\_

### I. FILL IN THE BLANKS:

1. The solid portion of the earth is known as\_\_\_\_\_
2. The\_\_\_\_\_ contains all forms of life.
3. \_\_\_\_\_is the gaseous layer that surround the earth.
4. \_\_\_\_\_was the first Indian women to climb the highest mountain peak Mt. Everest.
5. There are \_\_\_\_major continents.
6. \_\_\_\_ is the largest continent.
7. The combined landmass of Europe and Asia is known as\_\_\_\_\_.
8. The Equator runs almost through the middle of the \_\_\_\_\_continent
9. \_\_\_\_\_ is the world's longest river.
10. \_\_\_\_\_ is the world's longest mountain range.

### II. Writer the meaning of the following terms:-

1. Three –dimensional

---

---

---

---

2. Cartography

---

---

---

---

3. Astronomers

---

---

---

---

4. Crescent shape

---

---

---

---

5. Self -luminous :

---

---

---

---

**III. Case study**

Super Columbus bus and Italian born navigator whole for Spain. He thought Earth is round and on the other side of Europe, India is located. He was seeking a western sea route from Europe to Asia. On the morning of October 12 1492 he stepped ashore on an island in America with the impressions that he reached India. Although, Christopher was mistaken in his goal but he helped the world to know about America. He had shown magnificent seamanship and powerful leadership. He had shown courage and dedication in his long voyage over the unknown sea of darkness.

‘Christopher Columbus is known as a great voyager.’ How does his life inspire you?

**IV. Identify the following Space Research Center of India and write few lines about these:-**

**V. Prepare a model of the solar system**

**VI. On the outline map of India, show the location of Indian space research Centre.**



# G.D DAV PUBLIC SCHOOL



BHANDARKOLA, SATAR ROAD, DEOGHAR

## SUMMER VACATION ASSIGNMENT AND PROJECT: 2026-27

SUBJECT: ICT

CLASS & SEC: VI / \_\_\_\_

NAME: \_\_\_\_\_ ROLL No. \_\_\_\_\_

-  Draw and label Open Office Impress home screen.
-  Write about the different component of Open Office Impress window.



# G.D DAV PUBLIC SCHOOL

BHANDARKOLA, SATAR ROAD, DEOGHAR

## SUMMER VACATION ASSIGNMENT AND PROJECT: 2026-27

SUBJECT: Art & Craft

CLASS & SEC: VI / \_\_\_\_

NAME: \_\_\_\_\_ ROLL No. \_\_\_\_\_

1. Create a poster on “Save Environment” with slogan. (Painting Work)
2. Make a creative wall hanging craft using waste materials. (Craft Work)

### Instructions:

Show originality and creativity.

Proper presentation and neatness are important.

Write Name, Class, Section, and Roll Number properly.

General Instructions for All Classes

Complete all work during summer vacation.

Use A4 / A3 sheets, scrapbook, or art copy etc.

Keep all work neat and colorful.

Mention Name, Class, Section, and Roll Number on every page.